

Chapter 1: Heat equation

Fei Lu

Department of Mathematics, Johns Hopkins

$$\partial_t u = \partial_{xx} u + Q(x, t)$$

Section 1.2: Conduction of heat

Section 1.3: Initial boundary conditions

Section 1.4: Equilibrium

Section 1.5 Heat equation in 2D and 3D

Outline

Section 1.2: Conduction of heat

Section 1.3: Initial boundary conditions

Section 1.4: Equilibrium

Section 1.5 Heat equation in 2D and 3D

Section 1.2: Conduction of heat

How does heat “move”?

Consider the **thermal energy** in an ideal 1D rod:

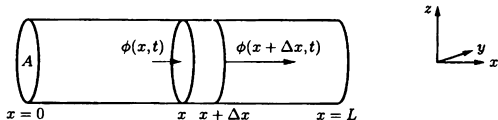


Figure 1.2.1 One-dimensional rod with heat energy flowing into and out of a thin slice.

$$\underbrace{e(x, t)}_{\text{Energy density}} = \underbrace{u(x, t)}_{\text{Temperature}} c(x)\rho(x) \quad (1)$$

- ▶ $c(x)$ = heat capacity
heat energy for 1 unit mass to raise the temperature 1 unit
- ▶ $\rho(x)$ = mass density
- ▶ total energy in a slice $(x, x + \Delta x)$: $\int_x^{x+\Delta x} e(z, t) dz$

⇒ study heat conduction via temperature evolution

Section 1.2: Conduction of heat

How does heat “move”?

Conservation of energy (rate of change in-time in $(x, x + \Delta x)$)

$$\text{total energy} = \text{flow in-out} + \text{generated} \quad (2)$$

$$\frac{d}{dt} \int_x^{x+\Delta x} e(z, t) dz = \phi(x, t) - \phi(x + \Delta x, t) + \int_x^{x+\Delta x} Q(z, t) dz \quad (3)$$

$\Delta x \rightarrow 0$, (Recall FTC: $\frac{1}{\Delta x} \int_x^{x+\Delta x} f(y) dy \rightarrow f(x)$ for $f \in C([x, x + b])$)

$$\partial_t e = -\partial_x \phi + Q(x, t) \quad (4)$$

Recall $e(x, t) = u(x, t)c(c)\rho(x)$, and

Fourier's law: $\phi = -K_0 \partial_x u$ i.e., the heat flow depends linearly on $\partial_x u$

$$\partial_t u c(x) \rho(x) = K_0 \partial_{xx} u + Q(x, t)$$

If uniform rod: $c(x) \equiv c_0$, $\rho(x) \equiv \rho_0 \rightarrow \kappa = \frac{K_0}{c_0 \rho_0}$; no source $Q = 0$; then

Heat Equation:

$$\partial_t u = \kappa \partial_{xx} u$$

Heat/Diffusion Equation:

$$\partial_t u = \kappa \partial_{xx} u$$

Diffusion: spread of heat/chemical/...

- ▶ diffusion of heat
 - $u(x, t)$ temperature; κ thermal diffusivity
 - Conservation of energy; Fourier's law
- ▶ diffusion of chemicals (perfumes or pollutants)
 - $u(x, t)$ concentration density; κ chemical diffusivity;
 - Conservation of mass; Fick's law



Diffusion

Source: Wiki

Reading: Diffusion (wiki); Brownian motion ([Wiki](#))

Outline

Section 1.2: Conduction of heat

Section 1.3: Initial boundary conditions

Section 1.4: Equilibrium

Section 1.5 Heat equation in 2D and 3D

Initial and boundary conditions

Heat Equation:

$$\partial_t u = \kappa \partial_{xx} u$$

Any solution to it? Infinitely many



Constant

$$u_0(x, t) \equiv 1$$

Linear in x

$$u_1(x, t) = x$$

Gaussian density

$$u_2(x, t) = \frac{1}{2\pi\sqrt{t}} e^{-\frac{x^2}{2t}}$$

- ▶ Any linear combination of those (principle of superposition)

$$u(x, t) = c_0 u_0 + c_1 u_1 + c_2 u_2,$$

for any constant $c_0, c_1, c_2 \in \mathbb{R}$

To determine a solution, need to specify **initial boundary conditions**

Initial and boundary conditions

Heat Equation:

$$\partial_t u = \kappa \partial_{xx} u$$

How many **initial boundary conditions** do we need?

Recall ODE: for $t \geq t_0$

- ▶ $y'(t) = f(y, t)$, with $y(t_0) = y_0$;
- ▶ $\frac{d^k}{dt^k} y = f(y, y^{(1)}, \dots, y^{(k-1)}, t)$, with $y(t_0), y'(t_0), \dots, y^{(k)}(t_0)$;
(Exe: what condition do we need on the k-ICs? How about IBVP?)

Domain of equation

$$t \geq t_0, x \in D, \text{ with } D = \mathbb{R}^d \text{ or } D = (0, L).$$

Initial condition for HE

$$u(x, t_0) = f(x), \text{ for all } x \in D$$

- ▶ when $D = \mathbb{R}^d$: IC determines the solution
- ▶ when $D = (0, L)$: need Boundary conditions

IVBP

Heat equation on a bounded interval

$$\partial_t u = \kappa \partial_{xx} u, \quad \text{with } x \in (0, L), t \geq 0$$

Initial condition $u(x, 0) = f(x), x \in [0, L]$

Boundary conditions boundaries $x = 0, x = L$

Dirichlet $u(0, t) = \phi(t), u(L, t) = \psi(t)$ prescribed temp.

Neumann $\partial_x u(0, t) = \phi(t), \partial_x u(L, t) = \psi(t)$ heat flux
 $\partial_x u(0, t) = \partial_x u(L, t) = 0$ insulated bd

Robin $a_1 \partial_x u(0, t) + a_0 u(0, t) = \phi(t)$ Newton's law of cooling
mixed $b_1 \partial_x u(L, t) + b_0 u(L, t) = \psi(t)$

Exe: read Section 1.3.

Outline

Section 1.2: Conduction of heat

Section 1.3: Initial boundary conditions

Section 1.4: Equilibrium

Section 1.5 Heat equation in 2D and 3D

Equilibrium Temperature Distribution

Q: What is Equilibrium and why?

The steady state; a state of rest or balance due to equal action of opposing forces.

Recall ODE: $y' = f(y)$, how to find its equilibrium? Stability?

Reading for fun: [Equilibrium of dynamics systems](#)

1. Prescribed Temperature Consider the IBVP

$$\partial_t u = \kappa \partial_{xx} u, \quad \text{with } x \in (0, L), t \geq 0$$

$$u(x, 0) = f(x)$$

$$u(0, t) = \phi(t), u(L, t) = \psi(t)$$

At equilibrium: $\partial_t \tilde{u} = 0$, $\tilde{u}(0, t) = \phi(t) \equiv T_1$, $\tilde{u}(L, t) = \psi(t) \equiv T_2$:

$$\partial_{xx} \tilde{u} = 0,$$

$$\tilde{u}(0) \equiv T_1, \tilde{u}(L) \equiv T_2$$

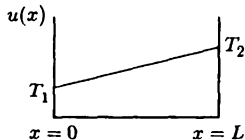
A 2nd order ODE! (What about the IC?)

Solution:

$$\tilde{u}(x) = T_1 + \frac{T_2 - T_1}{L}x.$$

Approach to equilibrium

$$\lim_{t \rightarrow \infty} u(t, x) = \tilde{u}(x).$$



2. Insulated BC

$$\partial_t u = \kappa \partial_{xx} u, \quad \text{with } x \in (0, L), t \geq 0$$

$$u(x, 0) = f(x)$$

$$\partial_x u(0, t) = 0, \partial_x u(L, t) = 0$$

At equilibrium:

$$\partial_{xx} \tilde{u} = 0,$$

$$\partial_x \tilde{u}(0) = \partial_x \tilde{u}(L) = 0$$

Solution:

$$\tilde{u}(x) = C$$

Arbitrary C ?

Figure?

3. Mixed BC

$$\partial_t u = \kappa \partial_{xx} u, \quad \text{with } x \in (0, L), t \geq 0$$

$$u(x, 0) = f(x)$$

$$u(0, t) = T, u(L, t) + \partial_x u(L, t) = 0$$

At equilibrium: $\partial_{xx} \tilde{u} = 0, \tilde{u}(0) = T, \partial_x \tilde{u}(L) + \tilde{u}(L) = 0$.

Solution:

$$\tilde{u}(x) = T \left(1 - \frac{x}{1+L} \right)$$

Figure?

Exe1.4.11

1.4.11. Suppose $\frac{\partial u}{\partial t} = \frac{\partial^2 u}{\partial x^2} + x$, $u(x, 0) = f(x)$, $\frac{\partial u}{\partial x}(0, t) = \beta$, $\frac{\partial u}{\partial x}(L, t) = 7$.

- Calculate the total thermal energy in the one-dimensional rod (as a function of time).
- From part (a), determine a value of β for which an equilibrium exists. For this value of β , determine $\lim_{t \rightarrow \infty} u(x, t)$.

Hint:

Outline

Section 1.2: Conduction of heat

Section 1.3: Initial boundary conditions

Section 1.4: Equilibrium

Section 1.5 Heat equation in 2D and 3D

Heat equation in 2D and 3D:

$$c\rho\partial_t u = \nabla \cdot (K_0 \nabla u) + Q, \quad x \in D \subset \mathbb{R}^d$$

Laplace's equation (potential equation)

$$\nabla^2 u = 0.$$

Polar and cylindrical coordinates

$$x = r \cos \theta; \quad y = r \sin \theta, \quad z = z$$

$$\nabla^2 u = \frac{1}{r} \frac{\partial}{\partial r} \left(r \frac{\partial u}{\partial r} \right) + \frac{1}{r^2} \frac{\partial^2 u}{\partial \theta^2} + \frac{\partial^2 u}{\partial z^2}$$

Spherical coordinates

$$x = \rho \sin \phi \cos \theta; \quad y = \rho \sin \phi \sin \theta, \quad z = \rho \cos \phi$$

$$\nabla^2 u = \frac{1}{\rho^2} \frac{\partial}{\partial \rho} \left(\rho^2 \frac{\partial u}{\partial \rho} \right) + \frac{1}{\rho^2 \sin \phi} \frac{\partial}{\partial \phi} \left(\sin \phi \frac{\partial u}{\partial \phi} \right) + \frac{1}{\rho^2 \sin^2 \phi} \frac{\partial^2 u}{\partial \theta^2}$$

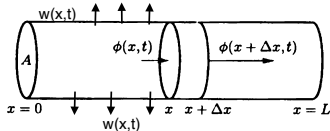
1.2.9. Consider a thin one-dimensional rod without sources of thermal energy whose lateral surface area is not insulated.

- (a) Assume that the heat energy flowing out of the lateral sides per unit surface area per unit time is $w(x, t)$. Derive the partial differential equation for the temperature $u(x, t)$.
- (b) Assume that $w(x, t)$ is proportional to the temperature difference between the rod $u(x, t)$ and a known outside temperature $\gamma(x, t)$. Derive that

$$c\rho \frac{\partial u}{\partial t} = \frac{\partial}{\partial x} \left(K_0 \frac{\partial u}{\partial x} \right) - \frac{P}{A} [u(x, t) - \gamma(x, t)] h(x), \quad (1.2.15)$$

where $h(x)$ is a positive x -dependent proportionality, P is the lateral perimeter, and A is the cross-sectional area.

- (c) Compare (1.2.15) to the equation for a one-dimensional rod whose lateral surfaces are insulated, but with heat sources.
- (d) Specialize (1.2.15) to a rod of circular cross section with constant thermal properties and 0° outside temperature.



Part(a): total energy = flow in-out + generated ($Q = 0$)

$$\frac{d}{dt} \int_x^{x+\Delta x} e(z, t) dz A = A[\phi(x, t) - \phi(x + \Delta x, t)] - P \int_x^{x+\Delta x} w(z, t) dz$$